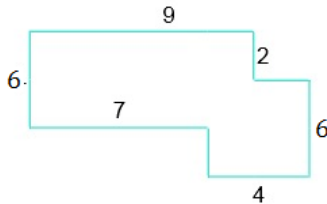


## Perimeter of a polygon: Worksheet 1.2

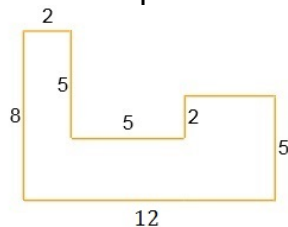
Name ..... Date ..... Score .....

1. If the length of side of a regular polygon of 6 sides is 9 m, then find its perimeter.
2. If the side lengths of a polygon are 8 cm, 8 cm, 9 cm, 9cm, 15 cm, what is its perimeter?
3. If the length of side of a regular polygon of 8 sides is 11 units, then find its perimeter.
4. If the side lengths of a polygon are 10 cm, 10 cm, 9 cm, 9cm, 12 cm, 18 cm what is its perimeter?
5. If the length of side of a regular polygon of 12 sides is 10 cm, then find its perimeter.
6. If the side lengths of a polygon are 11 m, 11 m, 12 m, 12 m, 16 m, 16 m what is its perimeter?
7. If the length of side of a regular polygon of 15 sides is 10 ft, then find its perimeter.

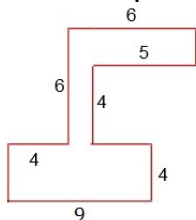
8. Find the perimeter of the following polygon.



9. Find the perimeter of the following polygon.



10. Find the perimeter of the following polygon.



## Solutions: Worksheet 1.2

1. 54 m
2. 49 cm
3. 88 units
4. 68 cm
5. 120 cm
6. 78 m
7. 150 ft
8. 38 units
9. 44 units
10. 48 units

