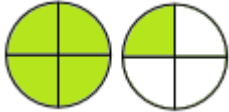


Writing a mixed number and an improper fraction for a shaded region: Worksheet 1.2

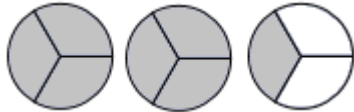
Name Date Score

Write an improper fraction for each of the shaded regions given below.

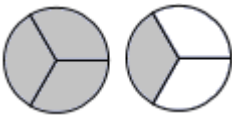
1.



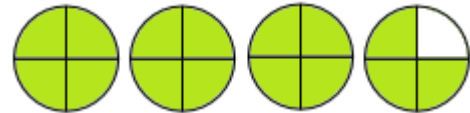
2.



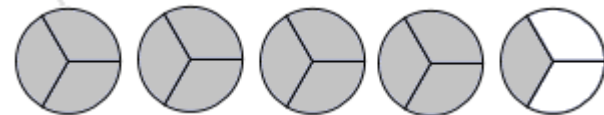
3.



4.



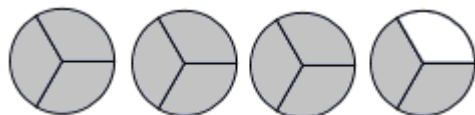
5.



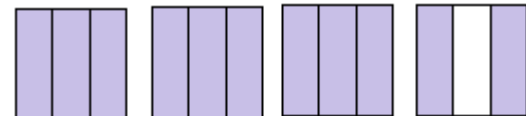
6.



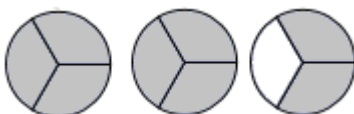
7.



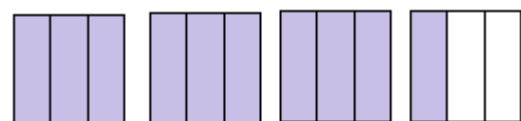
8.



9.



10.



Solutions: Worksheet 1.2

1. $5/4$
2. $7/3$
3. $4/3$
4. $15/4$
5. $13/3$
6. $10/4$
7. $11/3$
8. $11/3$
9. $8/3$
10. $10/3$

