

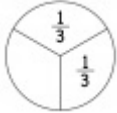
Fractional part of a circle: Worksheet 8.1

Name Date Score

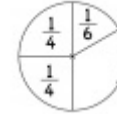
1. How much of the circle is blank? Write your answer as a fraction in simplest form.



2. How much of the circle is blank? Write your answer as a fraction in simplest form.



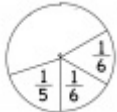
3. How much of the circle is blank? Write your answer as a fraction in simplest form.



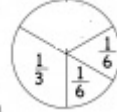
4. How much of the circle is blank? Write your answer as a fraction in simplest form.



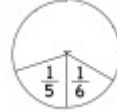
5. How much of the circle is blank? Write your answer as a fraction in simplest form.



6. How much of the circle is blank? Write your answer as a fraction in simplest form.



7. How much of the circle is blank? Write your answer as a fraction in simplest form.



8. How much of the circle is blank? Write your answer as a fraction in simplest form.



9. How much of the circle is blank? Write your answer as a fraction in simplest form.



10. How much of the circle is blank? Write your answer as a fraction in simplest form.



Solutions: Worksheet 8.1

1. $3/10$
2. $1/3$
3. $1/3$
4. $1/6$
5. $7/15$
6. $1/3$
7. $19/30$
8. $3/10$
9. $7/15$
10. $3/10$



