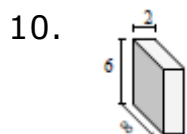
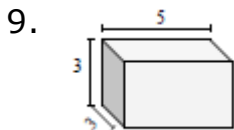
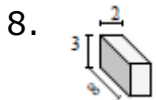
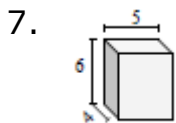
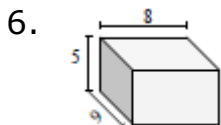
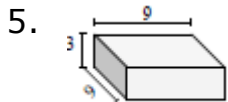
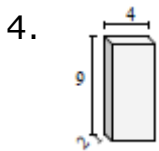
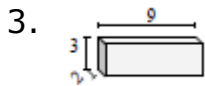
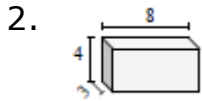
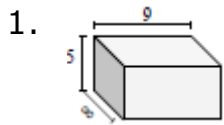


Volume of a Rectangular Prism: Worksheet 3.2

Name Date Score

Find the volume of each of the rectangular prisms in cubic cm.



Solutions: Worksheet 3.2

1. Volume of rectangular prism = 360 cu cm
2. Volume of rectangular prism = 96 cu cm
3. Volume of rectangular prism = 54 cu cm
4. Volume of rectangular prism = 72 cu cm
5. Volume of rectangular prism = 243 cu cm
6. Volume of rectangular prism = 360 cu cm
7. Volume of rectangular prism = 120 cu cm
8. Volume of rectangular prism = 48 cu cm
9. Volume of rectangular prism = 45 cu cm
10. Volume of rectangular prism = 96 cu cm

