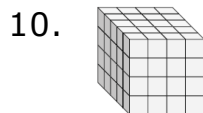
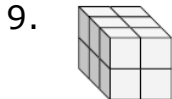
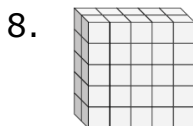
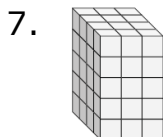
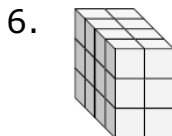
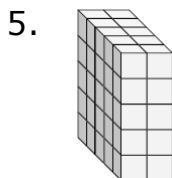
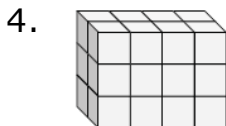
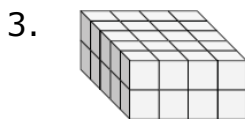
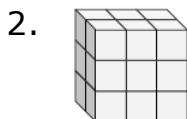
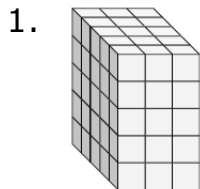


# Volume of a Rectangular Prism made of Unit Cubes: Worksheet 4.2

Name ..... Date ..... Score .....

Find the length, width and height of the following rectangular prisms. Then find their volumes.



## Solutions: Worksheet 4.2

1. Length = 5, Width = 3, Height = 5; Volume = 75 cu units
2. Length = 2, Width = 3, Height = 3; Volume = 18 cu units
3. Length = 5, Width = 4, Height = 2; Volume = 40 cu units
4. Length = 2, Width = 4, Height = 3; Volume = 24 cu units
5. Length = 5, Width = 2, Height = 5; Volume = 50 cu units
6. Length = 4, Width = 2, Height = 3; Volume = 24 cu units
7. Length = 4, Width = 3, Height = 5; Volume = 60 cu units
8. Length = 2, Width = 5, Height = 5; Volume = 50 cu units
9. Length = 3, Width = 2, Height = 2; Volume = 12 cu units
10. Length = 5, Width = 4, Height = 4; Volume = 80 cu units

