

# Classifying solids: Worksheet 1.3

Name ..... Date ..... Score .....

Use the diagrams to identify the names of the following shapes.

1.




2.



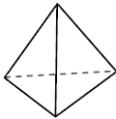
3.



4.



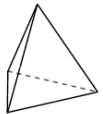
5.



6.



7.



8.



9.



10.



## Solutions: Worksheet 1.3

1. Triangular pyramid
2. Triangular prism
3. Rectangular pyramid
4. Sphere
5. Triangular pyramid
6. Rectangular prism
7. Triangular pyramid
8. Cylinder
9. Rectangular prism
10. Triangular prism

