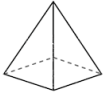


Classifying solids: Worksheet 1.1

Name Date Score

Use the diagrams to identify the names of the following shapes.

1.



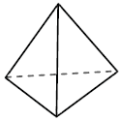
2.



3.



4.



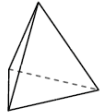
5.



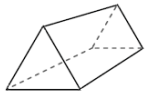
6.



7.



8.



9.



10.



Solutions: Worksheet 1.1

1. Rectangular pyramid
2. Triangular prism
3. Cube
4. Triangular pyramid
5. Sphere
6. Rectangular prism
7. Triangular pyramid
8. Triangular prism
9. Rectangular prism
10. Cylinder

